

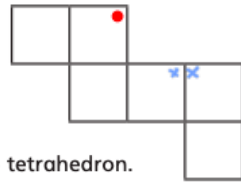
Maths Task

Here is the net of a cube.

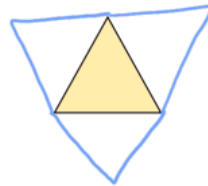
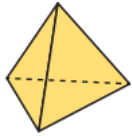
The net is made into a cube.

Which two corners will meet the corner marked with ●?

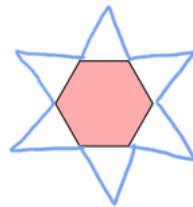
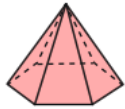
Mark them with a cross.



a) Complete a drawing of the net for the tetrahedron.



b) Draw the net of this hexagonal pyramid.



a The ground was lit up by the hovering spaceship.



Is this sentence active or passive?

_____ passive _____

a

b Can you think of a more formal synonym to replace this adjective?

Accept more formal synonyms, e.g. devastated, traumatised, distraught.

b

c Read the sentence below and underline the two words modal verbs:



The new restaurant, The Pizza Palace, will be opening at the weekend, and my family and I may go for a meal there.

c

e Mr Whoops has got in a muddle with his commas. Could you help him to add two missing commas to this sentence?

e

d Insert a colon in the correct place in the sentence below to separate the two independent clauses.

d

The golfer dropped to his knees in celebration: he had finally won a major tournament.

f During my magic show, I accidentally dropped my top hat, which revealed the hidden playing cards to the audience.

f



f Change these nouns/adjectives into verbs by adding the suffixes -ise, -ify, -ate or -en.

dark → _____ darken _____

glory → _____ glorify _____

