

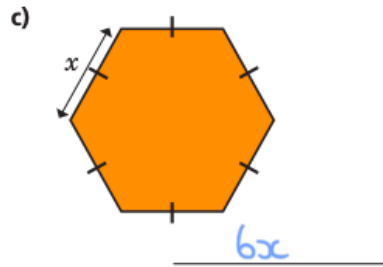
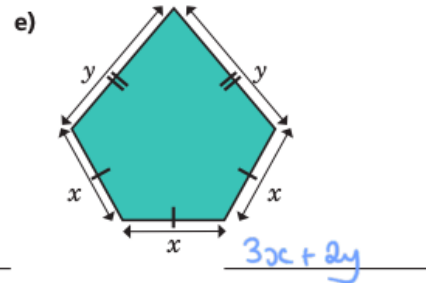
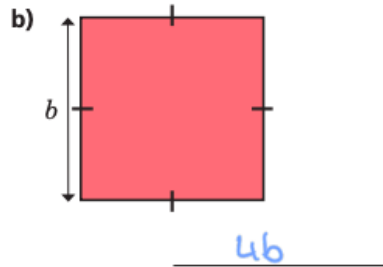
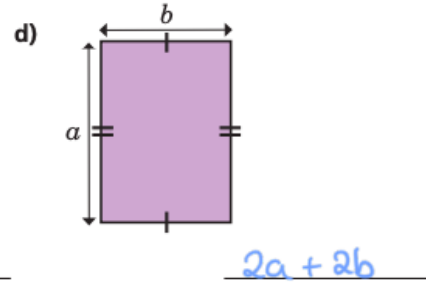
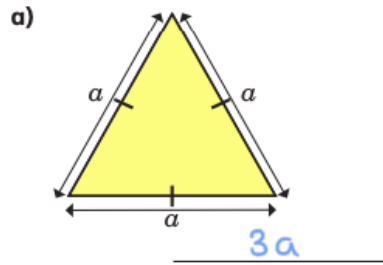


# Maths Task

# English Task



Write an algebraic expression to represent the perimeter of each shape.



Complete the daily Sumdog competition



**FINISHED? Tell us [HERE!](#)**

Remember to visit our Website to find all of the other learning activities to choose from today!  
Don't forget you can email [ParentSupport@orchard.emat.uk](mailto:ParentSupport@orchard.emat.uk) to ask for help, whatever you need!

Compete in the daily spelling league

