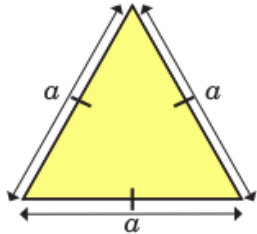


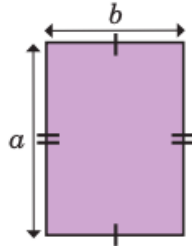
Write an algebraic expression to represent the perimeter of each shape.

a)



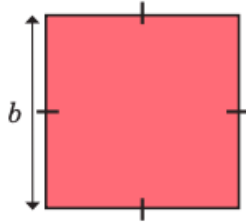
\_\_\_\_\_

d)



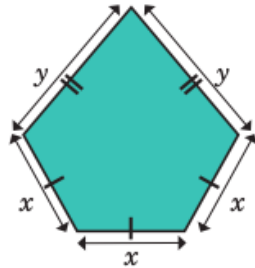
\_\_\_\_\_

b)



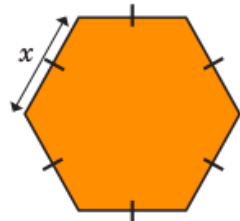
\_\_\_\_\_

e)



\_\_\_\_\_

c)



\_\_\_\_\_

Writing your story

It's time to write your story. To help you, you should have the following from the last two weeks of daily tasks.

- ✓ The model text – *Adventure at Sandy Cove*
- ✓ The toolkit for suspense
- ✓ The grammar/toolkit games
- ✓ Your ideas page
- ✓ The drawing you did of your setting
- ✓ And, most importantly, your plan!

Complete the daily Sumdog competition



**FINISHED? Tell us [HERE!](#)**

Remember to visit our Website to find all of the other learning activities to choose from today!  
Don't forget you can email [ParentSupport@orchard.emat.uk](mailto:ParentSupport@orchard.emat.uk) to ask for help, whatever you need!

Compete in the daily spelling league

