

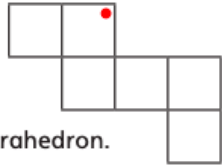
Maths Task

Here is the net of a cube.

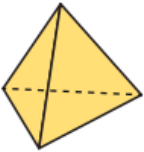
The net is made into a cube.

Which two corners will meet the corner marked with ●?

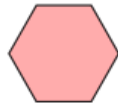
Mark them with a cross.



a) Complete a drawing of the net for the tetrahedron.



b) Draw the net of this hexagonal pyramid.



SPAG

Have a go at these SPAG questions.

a The ground was lit up by the hovering spaceship.



Is this sentence active or passive?

b Can you think of a more formal synonym to replace this adjective?

gutted → _____

c Mr Whoops has got in a muddle with his commas. Could you help him to add **two** missing commas to this sentence?

During my magic show I accidentally dropped my top hat which revealed the hidden playing cards to the audience.



c Read the sentence below and underline the **two** words modal verbs:



The new restaurant, The Pizza Palace, will be opening at the weekend, and my family and I may go for a meal there.

d Insert a colon in the correct place in the sentence below to separate the two independent clauses.

The golfer dropped to his knees in celebration he had finally won a major tournament.

f Change these nouns/adjectives into verbs by adding the suffixes -ise, -ify, -ate or -en.

dark → _____

glory → _____

