

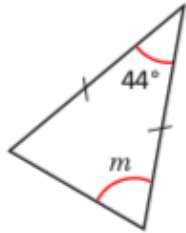


Maths Task

English Task

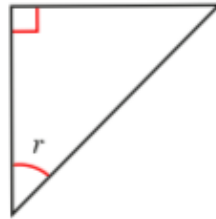
Work out the sizes of the unknown angles.

a)



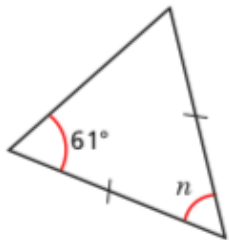
$$m = 68^\circ$$

c)



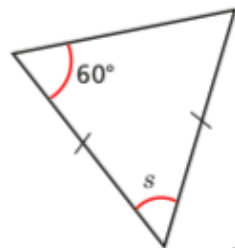
$$r = 45^\circ$$

b)



$$n = 58^\circ$$

d)



$$s = 60^\circ$$

FINISHED? Tell us [HERE!](#)

Remember to visit our Website to find all of the other learning activities to choose from today!
Don't forget you can email ParentSupport@orchard.emat.uk to ask for help, whatever you need!