



Maths Task

Home Learning Answers– Year 6

Thursday 23rd April

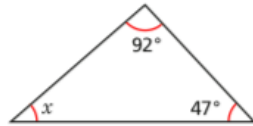
English Task



Work out the sizes of the unknown angles.

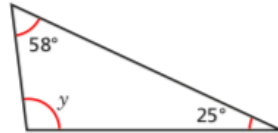
Give reasons for your answers.

a)



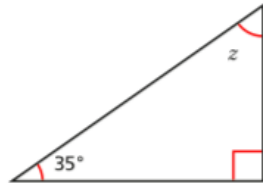
$x = 41^\circ$ because angles in a triangle sum to 180°

b)



$y = 97^\circ$ because angles in a triangle sum to 180°

c)



$z = 55^\circ$ because angles in a triangle sum to 180°

d)



$w = 121^\circ$ because angles in a triangle sum to 180°