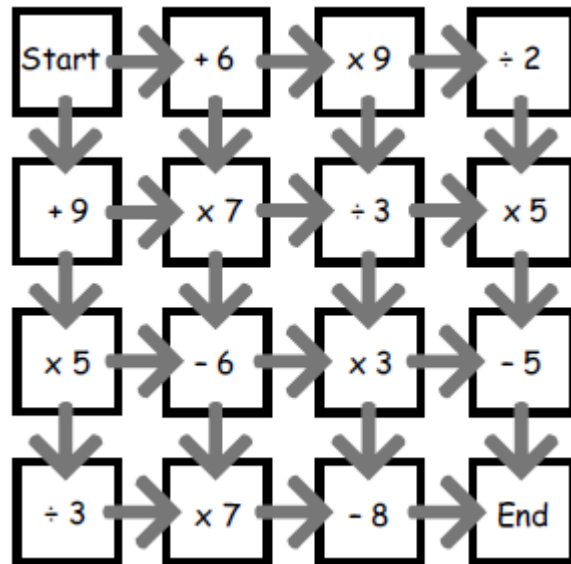


Maths Task

Follow the Line



Start at zero and find a route that ends in 100.
Which route has the highest total?
Which has the lowest total?

Challenge:




Find a route that starts at different starting numbers.

English Task

Instructions

These are instructions for the game Charades.
It is a mime game for 2 teams of 3 players
You will need: paper; scissors; stop watch; pen or pencil

Instructions

- 1 Cut the paper into three strips. 
- 2 Think of the names of TV programmes and books. 
- 3 Choose three and write one on each strip of paper.
- 4 Fold each strip so that the writing cannot be seen.
- 5 Swap your strips of paper with the other team.
- 6 One of your team picks a strip of paper.
- 7 Read what is on the paper and **mime** it to your team. 
- 8 The other members of the team should try to guess what you are miming. They can't ask questions! If they guess in two minutes, your team gets a point.
- 9 The other team has their turn.
- 10 The winner is the team with the most points.

What are these instructions for?
How many players should there be altogether?
What would you use the paper for?
What kind of things could you write on there?
Why are the instructions numbered? Does it make a difference? Why?

Challenge: Write a set of instructions for a game you have been playing at home. Remember to keep them short. What verb types will you need to use?

FINISHED? Tell us [HERE!](#)

Remember to visit our Website to find all of the other learning activities to choose from today!
Don't forget you can email ParentSupport@orchard.emat.uk to ask for help, whatever you need!